

परमाणु ऊर्जा केन्द्रीय विद्यालय, इन्दौर
(FA 3) & SA 2 कार्य पत्रक कक्षा-एक 2015-16

प्रश्न-1 बंदर क्या-क्या खा लेता होगा ?

उत्तर-

प्रश्न-2 गिलहरी क्या-क्या खा लेती होगी ?

उत्तर-

प्रश्न-3 पगड़ी को खूब रगड़ा तो पगड़ी फट गई। बताओ इनको खूब रगड़ोगे तो क्या होगा ?

उत्तर-

1-कागज़-

2-बर्तन-

3-जूते-

4-स्वेटर-

5-फर्श-

प्रश्न-4 पतंग कट कर कहाँ कहाँ गिर सकती है ?

उत्तर-

प्रश्न-5 अगर तुम्हारे घर में गेंद खो गई तो कहाँ-कहाँ ढूँढोगे ?

उत्तर-

प्रश्न-6 तुम्हारे घर में सबसे ज़्यादा काम कौन करता है ?

उत्तर-

प्रश्न-7 बुढ़िया दिन भर खाली रहती थी। उसके लिए कुछ काम सुझाओ ?

उत्तर-

प्रश्न-8

करके देखो

	चीज़ें	डूबेगा	तैरेगा
1-	चॉक	_____	_____
2-	पत्थर	_____	_____
3-	कागज़	_____	_____
4-	रूई	_____	_____

ATOMIC ENERGY CENTRAL SCHOOL, INDORE

Worksheet (FA III) & SA 2

Class I

Subject English

Name _____ Roll No. _____ Section _____

Q. 1. Answer the following questions.

a) What is the turtle's house called ?

b) Do you like to fly kites ? Why ?

c) Who held Sundari's long tail ?

d) Why do you clap your hands ?

Q. 2. Fill in the blanks.

a) c _ a _ l _ n _

d) c _ o _ d

b) s _ i _ e _

e) b _ a _ t _ f _ l

c) w _ o _ e _

f) b _ e _ z _

Q.3. Rearrange the following sentences in the right order.

a) I plant the seed.

b) I dig the earth.

c) The plant grows.

d) I water the plant.

1. _____

2. _____

3. _____

4. _____

Q.4. Complete the following sentences.

a) Trees are important for us.

b) They give us _____

c) Trees give us _____

d) Trees give us _____

ATOMIC ENERGY CENTRAL SCHOOL (INDORE)

Worksheet - 3 (2015-16) FA 3 & SA 2

Class - I Sec.-----

Subject- Mathematics


Name ----- Roll No.-----

Q.1. Do as directed-

A) Tick (✓) the shortest.



B) Tick (✓) the longer.


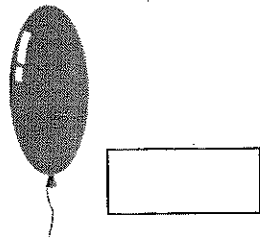


(C) Tick (✓) the heavier.

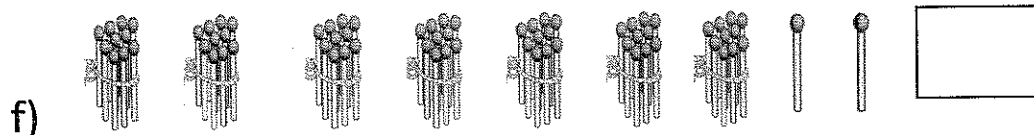
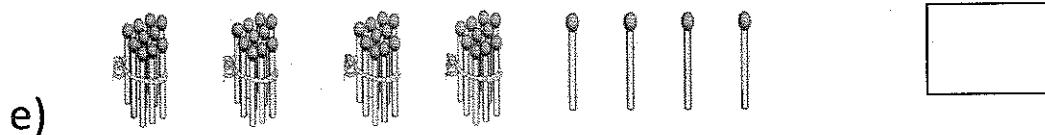
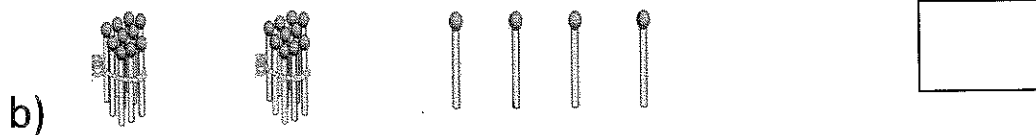
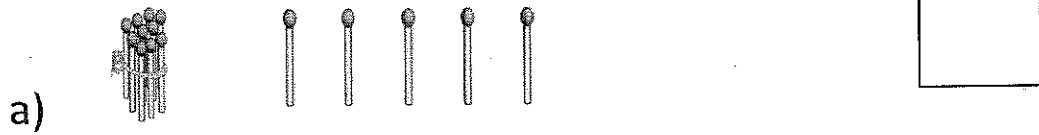


80

D) Tick (✓) the Thickest.



Q.2. Fill in the blanks.



Q.3. Count the number of letters in each word.

FACE =

ONE =

CLASS =

CIRCLE =

TRIANGLE =

QUESTIONS =

Q.4. Extend the sequence.

a) ○ ↑ ○ ↑

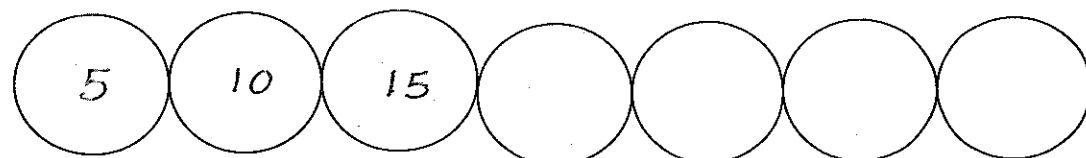

b) ☸ △ ☸ △

c) ↗ → ↗ →

d) ☸ ☷ ☸ ☷

e) 🌴 🌲 🌴 🌲

Q.5 Complete the pattern.



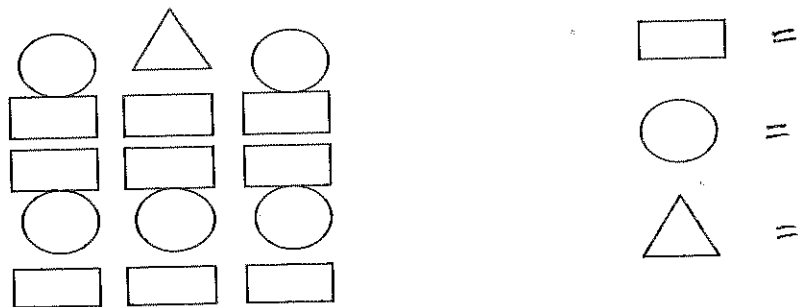
Q.6 . Write the missing numbers.

1	2	3							10
	12						18		
21				25					
			34					39	
		43						49	


Q.7. Write true or false.

- a) 5 comes after 4
- b) 3 tens make 30
- c) 40 comes before 14
- d) 5 one rupee coins make 3 rupees.....

Q.8 Count the shapes in the picture and write-



Q. 9. The monkey is feet away from the ball.



Atomic Energy Central School , Indore

EVS Worksheet I (2015-16)

Name _____ Class I Section _____ Date _____

Q.1 Match the following.

Independence day	25 December
Children's Day	26 January
Republic Day	2 October
Gandhi Jayanti	5 September
Christmas	14 November
Teachers' Day	15 August

Q.2 Circle the odd one out.

- Lohri Onam Bihu Chatt Rangoli
- Temple Mosque Pongal Gurudwara Church
- Tap Well Handpump Cooking Tank
- Stem Root Tree Leaves Flower Fruit
- Pear Papaya Guava Mint Orange
- Radish Onion Cucumber Gourd Tulip
- Daisy Waterlily Hibiscus Coconut Marigold
- Dog Cat Rabbit Mouse Elephant
- Hen Sparrow Myna Dolphin Eagle
- Lion Tiger Cow Bear Giraffe

Q.3 Name the following.

a) On this festival people worship goddess Lakshmi. _____

b) A special sweet dish made for Eid. _____

c) He brings gifts for children on Christmas. _____

d) Name any three uses of water.

e) Name any three big trees.

f) Name any three flowers.

g) A vegetable red in colour. _____

h) Three animals which live both on land and in water.

i) Any two big animals. _____

j) The four directions. _____


k) It shows all the countries and seas on the earth. _____


l) Name any four things which are used to make rangoli.


m) Name any four things that we see on the earth.


n) Name any three shapes which are used in making rangoli.


Q.4 Circle the correct answer.

a)  It does not live on land.


b)  It keeps on changing its shape.


c)  It cannot fly.


d)  It is a vegetable.

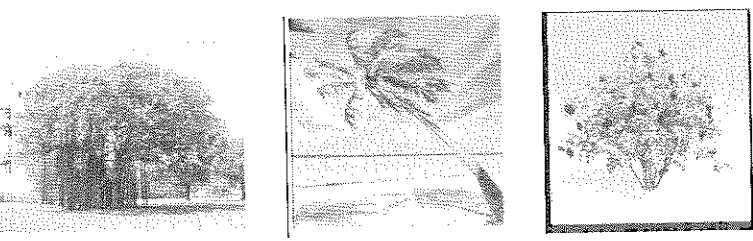
e)  It is a circle.

f)  It moves around the sun.

g)  It is a big animal.

h)  It is used for the festival of Raksha Bandhan.

i)  It is a use of water.

j)  It is a bush.

Q.5 Put ✓ for the statements which are correct and X for the statements which are wrong.

- a) We love to celebrate festivals with our family. _____
- b) Muslims fast for 20 days before Eid. _____
- c) The Sikhs have ten gurus. _____
- d) We can live without water. _____
- e) A seed grows into a new plant. _____
- f) We should drink dirty water. _____
- g) 365 days make a year. _____
- h) We must get the pollution checks of our vehicles done. _____
- i) We must burn a lot of crackers in Diwali. _____
- j) Fruits and vegetables do not make us healthy. _____
- k) The sun rises in the west. _____
- l) Plants make the air clean. _____
- m) Tulsi is a herb. _____
- n) The moon gives us heat and light. _____

Q.6 Tick the correct answers.

- a) People decorate their homes with these things in Diwali.
 - i) diyas ii) candles iii) Christmas tree iv) rangoli
- b) We get water from these :
 - i) washing utensils ii) rain iii) melting of snow iv) lakes
- c) These are flowers.
 - i) Lotus ii) Ladyfinger iii) Bougainvillea iv) Jasmine

d) These things make the water dirty.

i) throwing waste in water ii) waste from factories

iii) washing clothes far from the well iv) bathing animals in river

e) Due to these activities water is wasted

i) washing cars ii) broken pipes iii) leaking taps

iv) taking water in mug to brush teeth

f) These animals live both in land and water.

i) crocodile ii) tortoise ii) frog iv) whale v) seal

g) Muslims do these things on Eid.

i) fast for 30 days ii) eat sewain iii) wear new clothes

iv) go to mosque to pray v) decorate homes with diyas

h) We use water for these activities

i) cleaning floors ii) Watering plants iii) to put out fire

iv) to cook food v) to take a bath vi) to drink vii) all of these

i) These activities are not good for our earth.

i) wasting water ii) cutting trees iii) plucking flowers and leaves

iv) keeping surroundings clean v) hurting animals and birds

j) These animals can be seen near our homes.

i) hen ii) squirrel iii) cow iv) lion v) rat

Q.7 Answer the following questions.

a) Write any four things people do to celebrate Diwali.

b) Do you eat special food on festivals ?

c) Do you waste water ?

d) Write any two ways by which we can take care of our earth.

e) What is the shape of the earth?

f) Can you count the stars in the sky?

g) Write two sentences about the sun.

h) Where do the most birds live?

Q.8 Fill in the blanks.

a) Diwali is a festival of _____.

b) The birthday of Jesus Christ is celebrated as _____.

c) The fruits of plants have _____.

d) The earth takes one _____ to go round the sun.

e) The moon shines at _____.

f) You can tell the name of a plant by looking at its _____.


g) The sun is a big ball of _____.

h) Very big plants are called as _____.


Q.9 Match the following.




Guru Parab



Holi


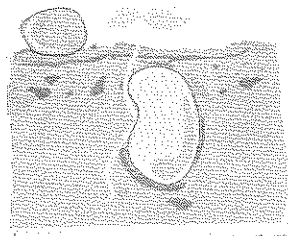
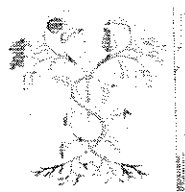


Diwali

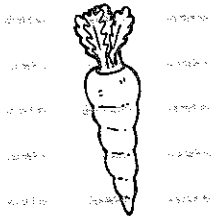








Lohri


Q.10 Number the following activities in correct order.



Q.11 Identify and name the given pictures.



Q.12 Look at the picture of the rising sun and fill in the blanks.




© Can Stock Photo





- i) You are facing the _____ direction.
- ii) Your back is towards the _____ direction.
- iii) Your right hand is pointing towards _____ direction.
- iv) Your left hand is pointing towards the _____ direction.

Q.13 Colour the picture.





It is a _____.



Q.14 Name the following festivals.



Q.15 Tick the pictures which show wastage of water.



132