

परमाणु ऊर्जा केन्द्रीय विद्यालय, इन्दौर

SA 2 & (एफ ए-4) कार्य पत्रक कक्षा-एक 2015-16
(हिन्दी)

प्रश्न-1 जीभ जलने पर तुम क्या करते हो ?

उत्तर- _____

प्रश्न-2 लाल मिर्च खाते ही लालू की जीभ जल गई। तुम्हारी जीभ क्या-क्या खाने से जलती है ?

उत्तर- _____

प्रश्न-3 चार चने देकर इनसे क्या-क्या करवाया जा सकता है ?

उत्तर- 1-माली- _____
2-हलवाई- _____
3-दीदी- _____
4-दोस्त- _____

प्रश्न-4 कौन किसके साथ ? मिलाओ

उत्तर- 1- बुढ़िया पकौड़ी
2- मक्खी रोटी
3- बिल्ली चक्की
4- कुत्ता मिठाई

प्रश्न-5 तुम्हें कब-कब डर लगता है ?


उत्तर- _____

प्रश्न-6 हलीम को रास्ते में क्या-क्या दिखा होगा ?

उत्तर- _____

प्रश्न 7

बताओ तो जानें!



ATOMIC ENERGY CENTRAL SCHOOL, INDORE

Worksheet (SA II) & FA 4

Subject English

Class I

Name _____ Roll No. _____ Section _____

Q. 1. Answer the following questions.

a) When do you see a rainbow in the sky?

b) Which word sounds like 'high'?

c) What do you do when you are angry?

d) What games do you play with your friends?

e) Do you like puddles?

Q.2. Write the rhyming words of the following.

a) circle _____

b) fire _____

c) drew _____

Q.3. Fill in the blanks.

a) f _ _ e _ d

e) q _ _ e _

b) m _ u _ t _ i _

f) p _ l _ t

c) n _ _ d _ e

g) t _ u _ k

d) e _ e _ h _ n _

e) c _ i _ d _ e _

Q. 4. Pick the odd one out.

a) May June Elephant July August

b) Friday Holiday Saturday Sunday Monday

c) Tailor Postman Sailor Motor Pilot

Q. 5. Complete the following sentences.

a) I can write my name.

b) My name is _____.

c) I live in _____.

d) I study in class _____.(one)

e) The name of my school is _____

ATOMIC ENERGY CENTRAL SCHOOL (INDORE)

Worksheet - (FA- 4) 2015-16 & SA2


Class - I

Sec.-----

Subject- Mathematics

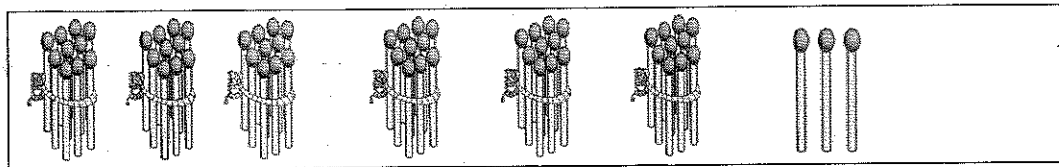
Name ----- Roll No.-----

Q.1. Write the number.




TENS

ONES



TENS

ONES



TENS


ONES

Q. 2. Draw the bundles and ones of the numbers.



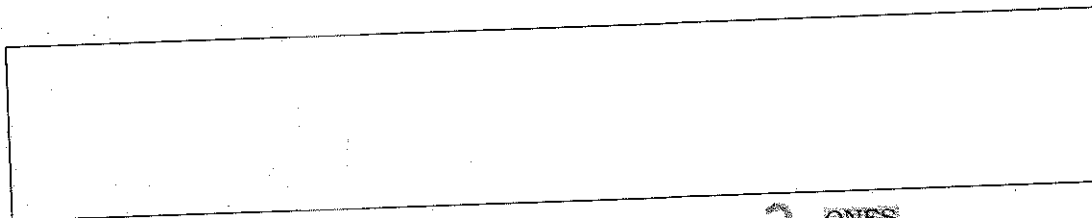
4 TENS

6 ONES



3 TENS

8 ONES



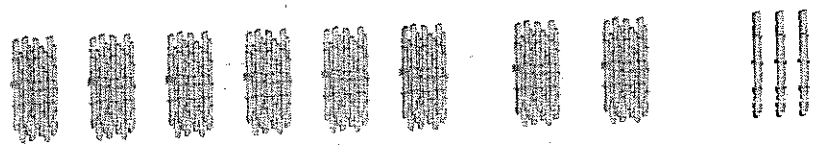
5 TENS

2 ONES


Q.3 . Write the missing numbers.

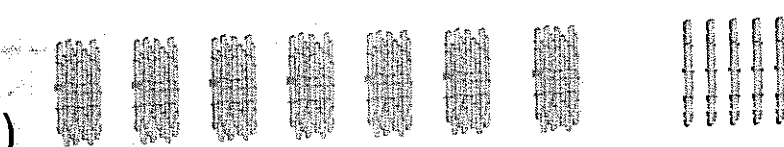
51	52	53							60
	62						68		
71				75					
			84					89	
		93						99	

Q.4. Fill in the blanks.

a) 

b) 

c) 

d) 

Q.5. See the coins and write their values.



.....



.....



.....

Q.6. Circle the biggest numbers.

a) 54 82 69 80

b) 92 60 88 79

c) 74 66 59 73

d) 80 91 79 90

e) 87 89 88 86

f) 69 68 67 70

Q. 7. Circle the smaller numbers.

a) 54 82 69 80

b) 92 60 88 79

c) 74 66 59 73

36

- d) 80 91 79 90
e) 87 89 88 86
f) 69 68 67 70

Q. 8. Write the numbers which comes before.

- a) 78 b) 63
c) 80 d) 95
d) 55 e) 61

Q. 9. Write the numbers which comes after.

- a) 56 b) 63
c) 80 d) 95
d) 55 e) 61

Q. 10. Write the numbers which comes between.

- a) 66 and 68
- b) 59 and 61
- c) 83 and 85
- d) 77 and 79
- e) 70 and 72
- f) 95 and 97

Coins



Q. 11.

Make the given amount using

Different Combination of coins.

6 Rupees

4 Rupees

2 Rupees

5 Rupees

3 Rupees

1 Rupee

7 Rupees

Q. 12. Write in words.

a) 21

b) 34

c) 57.....


Q. 13. Write the number.

a) Fifty


b) Thirty six

c) Sixty five

Q. 14. How much will the balloons cost ?



1 Rupee



ATOMIC ENERGY CENTRAL SCHOOL (INDORE)

Worksheet - (SA-2) 2015-16

Class - I




Sec.-----

Subject- Mathematics


Name ----- Roll No.-----

Q.1. Do as directed-

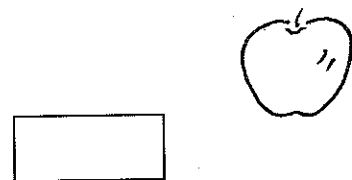
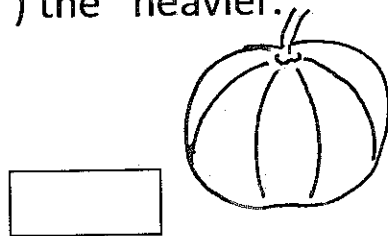
A) Tick (✓) the shortest .



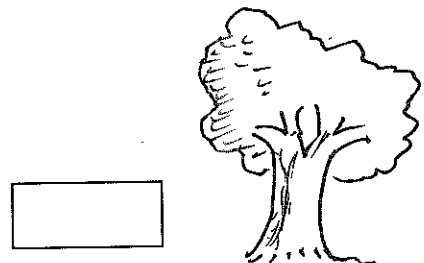

B) Tick (✓) the longer.




(C) Tick (✓) the heavier.




D) Tick (✓) the Thicker.




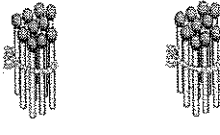



E) My pencil is ----- span long.

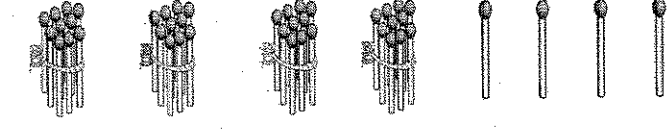
Q.2. Fill in the blanks.

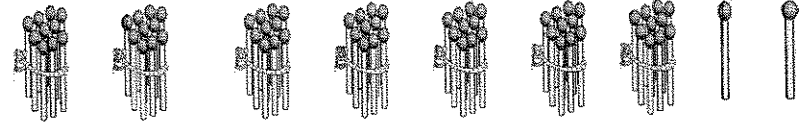
a) 

b) 

c) 

d) 

e) 

f) 

Q.3. Count the number of letters in each name word.

RAJU

BALVEER

RAHUL

SUHANI

SUBHASH

Q.4. Extend the sequence.

a) ○ ▲ ○ ▲

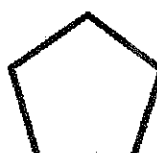
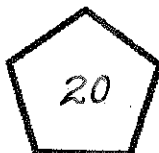


b) ↑ 🌳 ↑ 🌳

c) ☀️ 🌙 ☀️ 🌙

d) 🌳 🏠 🌳 🏠

e) ⊕ ▼ ⊕ ▼

Q.5 Complete the pattern.




Q.6 . Write the missing numbers.

41	42	43							50
	52						58		
61				65					
			74					79	
		83						89	

Q.7. Write true or false.

- a) 15 comes after 14
- b) 4 tens make 40
- c) 14 comes before 40
- d) 2 one rupee coins make 3 rupees.....
- e) 100 come after 99
- f) The word 'SCHOOL' has 4 letters.....
- g) An ant is heavier than an elephant.....

Q.8 Count the shapes in the picture and write-



93

10

Q. 9. Write in words.

- a) 60
- b) 28
- c) 57.....

Q. 10. Write the number.

- a) Fifty two
- b) seventy six
- c) Sixty five

Q. 11. Do as directed.

Fill in the blanks.

- 59, 60, -----, -----, 63, 64, -----, -----, -----
- 84, 85, -----, -----, 88, 89, -----, -----, -----
- 92, 93, -----, -----, 96, 97, -----, -----, -----
- 72, 73, -----, -----, 76, 77, -----, -----, -----



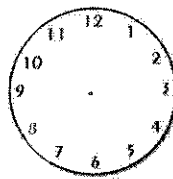
Atomic Energy Central School , Indore

EVS Worksheet II (2015-16)

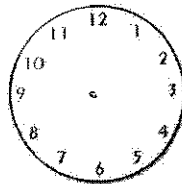
Name _____ Class I Section _____ Date _____

Q.1 Draw the hands of the clock to show the time.

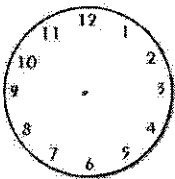
a) I get up in the morning at 6 o'clock.



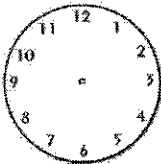
b) I reach the school at 7: 15 am.



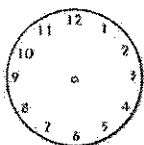
c) I have my lunch break at 10:30 am.



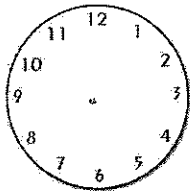
d) I come back from school at 2 o'clock.



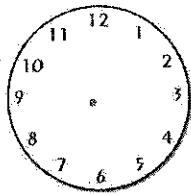
e) I do my homework at 4:30 pm .



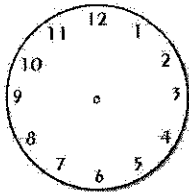
f) I go to play with my friends at 5:30 pm in the evening.



g) I have my dinner at 8 o'clock in the night.



h) I go to sleep at 9:30 pm in the night.



Q.2 Arrange the letters and write the names of the months of the year.

RCAHM _____

UNEJ _____

RDEECMEB _____

YFBERAUR _____

TAUGSU _____

RSEEPMBTE _____

YJLU _____

RNVOMEBE _____

YJNAUAR _____

LIRPA _____

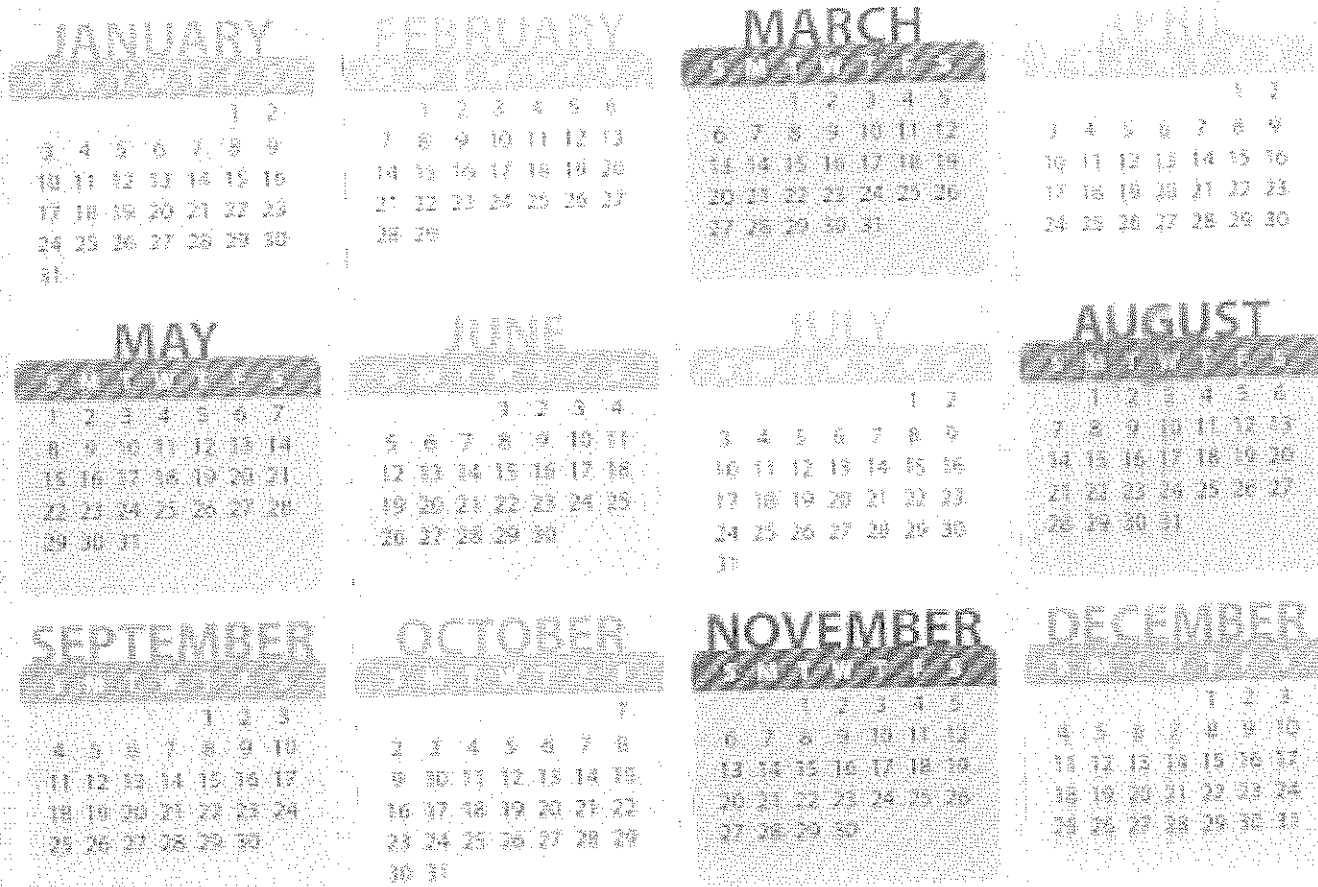
YMA _____

QOTCREB _____

Q.3 Write the names of the seven days of the week.

Q.4 Read the calendar of 2016 and circle the following dates.

CALENDAR 2016



Makar Sankranti 15 January

Ramzan Eid 6 July

Science Day 28 February

Raksha Bandhan 17 August

Maha Shivratri 7 March

Ganesh Chaturthi 5 September

Holi 23 March

Dussehra 11 October

Good Friday 25 March

Diwali 30 November

Shri Ram Navmi 15 April

Guru Nanak Jayanti 14 November

Mahavir Jayanti 19 April

Eid-E-Milad 12 December

Buddha Purnima 21 May

Last day of the year 31 December

Q.5 Fill in the blanks.

- a) A _____ shows us the time. (calendar / clock)
- b) There are _____ months in a year. (twelve / seven)
- c) Which day comes after Thursday? (Wednesday / Friday) _____
- d) In _____ people travel by tractor. (cities / villages)
- e) A _____ moves very fast. (tonga / car)
- f) Paper folding is a kind of _____. (craft / decoration)

Q.6 Name the following.

- a) Any two months _____
- b) Any two days of the week _____
- c) Any two means of water transport _____
- d) Two means of air transport _____
- e) Two means of land transport _____
- f) Two ~~ornaments~~ which you can make with paper

- g) Any two vehicles which move slowly

- h) Any four means of communication

Q.7 Answer the following questions.

- a) Which day is a holiday for you ?

b)How do you go to school everyday ?

c) Is it fun to travel from one place to another ?

d)Do you like to get up early in the morning ?

e)Which month do you like the most ? Why ?

f)Write any five activities which you can do on your own.


g)How do you get in touch with people when you cannot go to meet them?

h) Write any five things which your EVS book has taught you.


i) Name any two means of transport you use to travel to far away places.

j) What do you like to do on Sunday?


Q.9 See the following pictures and write the missing letters.



S _ _ O O _ _ E _ _



_ _ R A _ _ N




_ _ R _ _ C K




A _ _ _ P A _ _ E

Q9 contd on page 7




__UL__OC__C__R__




__U__




__UT__R__C__SH__W



__A__



C__C__E

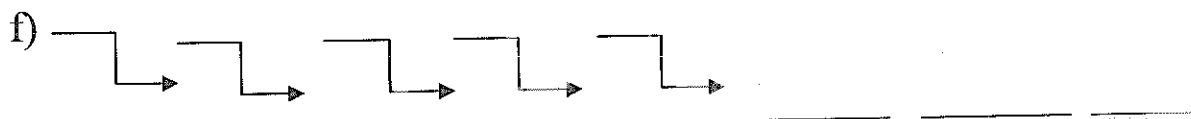
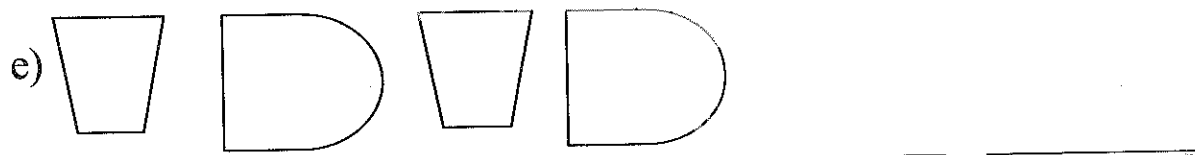
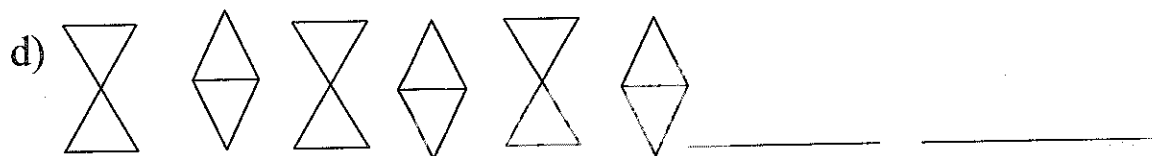
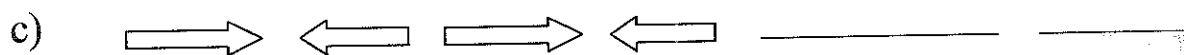



__S__I__

Q.10 Complete your diary.

- a) My name _____
- b) My birthday _____
- c) My father's name _____
- d) My father's birthday _____
- e) My mother's name _____
- f) My mother's birthday _____
- g) My sister's / brother's name _____
- h) My sister's / brother's birthday _____
- i) My favourite festival _____
- j) One thing that I made in craft _____
- k) My best friend's name _____

Q11 Complete the pattern.



Q.12 Are there any things which you want to do but cannot do? List any five of them.
