

परमाणु ऊर्जा केन्द्रीय विद्यालय, इन्दौर

FA 3 & SA 2

कार्य पत्रक

कक्षा – दूसरी

विषय – हिन्दी

सत्र – 2015 – 2016

नाम _____ अनुक्रमांक _____ ह0 _____

प्रश्न 1— तुमने बुलबुल को कैसे पहचाना ?

उत्तर – मैंने बुलबुल को पहचाना _____

प्रश्न 2— सिपाही बुलबुल के सिर पर किस रंग की कलगी होती है ?

उत्तर – _____

प्रश्न 3— बुलबुल अपना घर किन चीजों से बनाती है ? तुम्हारा घर किन चीजों से बना है ?

उत्तर – _____

प्रश्न 4— बुलबुल क्या खाना पसंद करती है ? तुम्हें क्या-क्या पसंद है ?

उत्तर – _____

प्रश्न 5— बुलबुल के बारे में चार वाक्य लिखो ।

1 _____
2 _____
3 _____
4 _____

प्रश्न 6— कैसी मीठी सारंगी है ! इसका क्या मतलब है ?

उत्तर — _____

प्रश्न 7— भोला ने क्यों सोचा कि सभी झूठ बोल रहे हैं ?

उत्तर — _____

प्रश्न 8— कुछ बाजों के नाम लिखो ।

तारवाले — _____
थापवाले — _____
अन्य — _____

प्रश्न 9— क्या खाने की चीजें सिर्फ़ मीठी ही होती हैं ? मीठे के अलावा इनका और क्या —
क्या स्वाद होता है ?

उत्तर — _____

प्रश्न 10— टेसू के बारे में चार वाक्य लिखो ।

1 _____
2 _____
3 _____
4 _____

प्रश्न 11— नीचे लिखे वाक्यों को बदलकर लिखो ।

क) कितने हैं कंबल में खाने ?

उत्तर — _____

ख) एक झुंड में भेड़ें कितनी ?

उत्तर — _____

ग) टेसू राजा कहे पुकार, लाओ मुझको दे दो चार ।

उत्तर — _____

घ) फूलों से बनाओ होली के रंग ।

उत्तर — _____

प्रश्न 12— कविता की पंक्तियाँ पूरी करो ।

क) टेसू राजा बीच _____

खड़े हुए ले रहे _____ ।

ख) एक झुंड में _____ कितनी ?

एक पेड़ पर _____ जितनी ।

Atomic Energy Central School, Indore

English

Worksheet (2015-16)

Class :II

Name: _____

Roll No. _____

1. Fill in the blanks.


a. There is one _____ in the room. (lamp / lamps)



b. My mother gave me two _____. (apple / apples)




c. There are two _____ in my classroom. (chairs / chair)



d. I have 6 _____. (ball / balls)



2. Look at the picture and fill in the blanks in / on / under / near.



a. The mat is _____ the floor.

b. The ball is _____ the table.


c. The flowers are _____ the vase.

d. The cat is _____ the arm chair.

3. Write singulars and plurals.




woman






child





fish





foot







ox





4. Look at the pictures and fill in the blanks with opposite words.




black




day




push



cold



5. Look at the picture and write eight sentences on it.



Atomic Energy Central School, Indore

Worksheet(2015-2016)

Class:II

Mathematics

Date _____

Name _____ Roll No _____

Q1.Fill in the blanks.

- a)Five ten rupees notes is equal to _____ rupees.
- b)Two days before Friday is _____.
- c)In a leap year February has _____ days.
- d)The letter C has only _____ line.
- e)In a digital clock numbers are written using _____ lines.

Q2.Match the following:

Standing line



Sleeping line



Slanting line



Curved line




Q3.Do as directed.

a)Draw 10 rupee notes and 1 rupee coins to show the given amounts.

(i) Rs 50

(ii)Rs 2

b) Write the amount.



_____ rupees.

c) A man caught 7 rats. For catching each rat he gets 2 gold coins. How many gold coins does he get? Show your answer using for 10 and for 1.

d) Use any two of the given notes and coins to buy the following things.

Rs 100

Rs 50

Rs 20

Rs 10

5
rupees

2
rupees

1
rupee



Rs 150



Rs 7

a b

Q4)Solve.

a)Count the number of lines in the given word.

J E R R Y


Standing lines _____

Sleeping lines _____

Slanting lines _____

Curved lines _____

b)See the calendar of February 2016.

February 2016 						
Su	Mo	Tu	We	Th	Fr	Sa
	1	2	3	4	5	6
7	8	9	10	11	12	13
14	15	16	17	18	19	20
21	22	23	24	25	26	27
28	29					

(i)Answer the following questions.

a)How many days are there in February 2016? _____

b)What is the day on 15 February 2016? _____

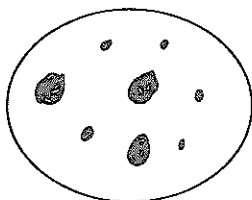
c)How many Sundays are there in this month? _____

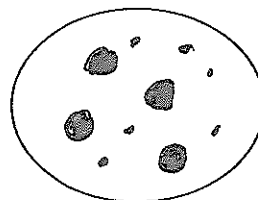
d)What is the date on Second Saturday of this month? _____

c)Write the number represented by circles A and B.

Big dot = 10

small dot = 1





ATOMIC ENERGY CENTRAL SCHOOL-INDORE

Class II

Subject- EVS (Worksheet) FA-3 & SA 2

Session 2015-16

Name -----

Roll No -----

Q-1 Fill in the blanks.

- i) Mahatma Gandhi was a great -----
- ii) Mahatma Gandhi worked hard to remove many-----
- iii) We must follow -----
- iv) -----is used in all means of transport.
- v) Goods trains carry -----things.
- vi) Sending and receiving messages is called -----.
- vii) People who cannot speak use -----
- viii) Our earth is the -----planet from the sun.
- ix) The sun is like a -----ball.
- x) -----is much smaller than the earth.

Q-2 Put \checkmark or X.

- I) The moon twinkles at night, ()
- II) The sun is covered with snow. ()
- III) We post letters in the letter box. ()
- IV) Radio and T.V. help us to communicate with many people at the same time. ()
- V) Trains fly in the air. ()

(2)

VI) Always push others. ()

Q-3 Answer the following questions.

i) Why is India called a land of festivals?

Ans -----

ii) Why is it important to follow traffic rules?

Ans -----

iii) Write any one safety rule that is important while playing in the park.

Ans -----

iv) Write two names of vehicles that you like?

Ans -----

v) Why do we need to travel?

Ans -----

vi) Name four land forms?

(2)

(3)

Ans (1) ----- (2) -----

(3) ----- (4) -----

vii) Why is a large part of the earth painted blue on the globe?

Ans -----

(3)

123