

परमाणु ऊर्जा केन्द्रीय विद्यालय, इन्दौर
कार्य पत्रक
कक्षा – दूसरी
विषय – हिन्दी
सत्र – 2015 – 2016

FA 4 & SA 2

नाम _____ अनुक्रमांक _____ ह0 _____

प्रश्न 1— क्या बूढ़ी अम्मा पहले से जानती थी कि एककी और दोक्की उसके घर आने वाली हैं ? तुम्हें कैसे पता चला ?

उत्तर — _____

प्रश्न 2— एककी ने झाड़ी और गाय की मदद कैसे की ?

उत्तर — _____

प्रश्न 3— किन – किन चीजों का रंग कुछ समय बाद फीका हो जाता है ?

उत्तर — _____

प्रश्न 4— दोक्की की अम्मा क्या सोचती थी ?

उत्तर — _____

प्रश्न 5— दर्जी चूहे की किस बात से डर गया ?

उत्तर — _____

प्रश्न 6— चूहा टोपी क्यों पहनना चाहता था ?

उत्तर —

प्रश्न 7— बारिश के मौसम में ऐसा क्या होता है जिससे चूहा अपने बिल में से निकल नहीं पाया होगा ?

उत्तर —

प्रश्न 8— अगर हवा न हो तो क्या होगा ?

उत्तर —

प्रश्न 9— अगर पेड़-पौधे न हों तो क्या होगा ?

उत्तर —

प्रश्न 10— तुम धूप से बचने के लिए क्या-क्या करते हो ?

उत्तर —

प्रश्न 11— अगर पानी न हो तो क्या होगा ?

उत्तर —

प्रश्न 12— तेंदुए का बच्चा बस के पास कहाँ से पहुँच गया होगा ?

उत्तर — _____

प्रश्न 13— तुम्हारे घर के आसपास कौन-कौन से जानवर या पक्षी नज़र आते हैं ?

उत्तर — _____

प्रश्न 14— किन-किन चीज़ों को नहीं गिना जा सकता ?

उत्तर — _____

प्रश्न 15— किन-किन चीज़ों पर खोल चढ़ाया जाता है ?

उत्तर — _____

प्रश्न 16— पाँच – पाँच वाक्य लिखो ।

// बुलबुल //

// सारंगी //

// 4 //

// सूरज //

// गाय //

(4)

Atomic Energy Central School, Indore

English

Worksheet (2015-16)

Class :II

Name: _____

Roll No. _____

1. Fill in the blanks.

- a. There are many _____ in a garden. (child / children)
- b. An _____ a day keeps a doctor away. (apples / apple)
- c. My mother cooks tasty food. _____ made a cake. (she / he)
- d. I don't eat bitter gourd. _____ is bitter in taste. (it / I)
- e. _____ father works at RRCAT, Indore. (I / my)
- f. _____ egg is oval in shape. (an / a)
- g. Give me _____ banana. (an / a)
- h. _____ are you doing? (where / what)
- i. _____ is my pencil? (where / why)
- j. _____ will you come ? (what / when)

2. Look at the letters given below and make one word starting with each one of them.

1. H _____
2. U _____
3. C _____
4. S _____
5. W _____

3. Write five sentences on a picnic.

(Clues : eating , playing , cleaning , going in bus , friends)

4. Make sentences using the following words.

shoot _____

porridge _____

water _____

tired _____

please _____

sea _____

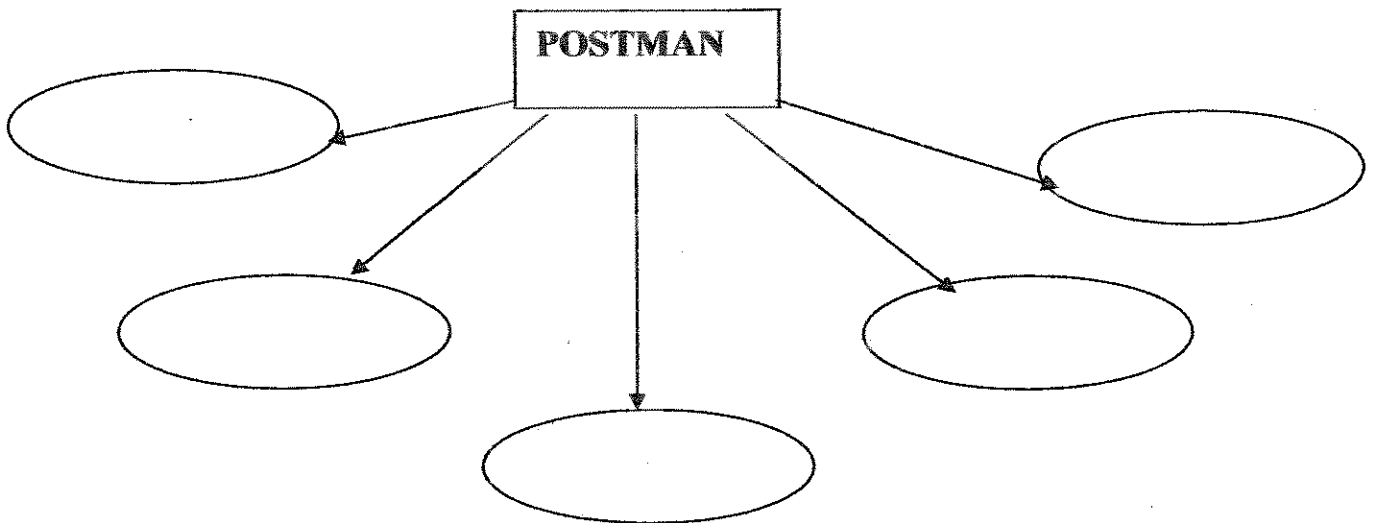
magic _____

58

5. Make words from the jumbled letters.

- a. uhcsion - _____
- b. holew - _____
- c. gicma - _____
- d. gosths - _____
- e. uzzlep - _____

6. Make new words using letters from the word 'POSTMAN'.



7. Correct the sentences.

a. The grasshopper laughed at the lazy ants.

b. Tara was very rich.

509

Atomic Energy Central School, Indore

Worksheet(2015-2016)

Class:II

Mathematics

Date _____

Name _____ Roll No _____

Q1.Solve the following:








a)Following are the names of the five games.

FOOTBALL CRICKET BASKETBALL KHO-KHO KABBADI

(i) The number of games starting with letter K is _____.

(ii) _____ games have 7 letters.

(iii)The game with the most number of letters is _____.

b)Sita and Geeta are playing a card game.Each  is equal to 10 pointsand each  is equal to 1 point.Ram got     Raj got      

Therefore _____ is the winner.

c)Ram scored 34 runs in a cricket match and Raj scored 15 runs.How many

runs did they make in all?Show the total runs using  and  cards.

d) Children of class two counted the number of trees near their school. See the table and answer the following questions:

Trees	Number of trees
Mango	15
Neem	10
Coconut	08
Banyan	18

(i) Mango trees are more than neem trees. How many more?

(ii) _____ tree is least in number.

(iii) Children planted some more banyan trees to make 25. How many more did they plant? _____

e) Seema is 15 years old. Her brother is 22 years old. How many years older is Seema's brother?

Q2. Find the answer.

$$\begin{array}{r} \text{(i)} \quad 3 \quad 4 \\ + \quad 2 \quad 7 \\ \hline \square \end{array}$$

$$\begin{array}{r} \text{(ii)} \quad 4 \quad 2 \\ + \quad 2 \quad 7 \\ \hline \square \end{array}$$

$$\begin{array}{r} \text{(iii)} \quad 6 \quad 5 \\ - \quad 1 \quad 8 \\ \hline \square \end{array}$$

$$\begin{array}{r} \text{(iv)} \quad 9 \quad 7 \\ - \quad 8 \quad 3 \\ \hline \square \end{array}$$

Q3. Fill in the boxes.

$$\text{(i)} \quad \square + \square = 75$$


$$\text{(ii)} \quad \square - \square = 48$$

$$\text{(iii)} \quad 8 + 5 + \square = 20$$

$$\text{(iv)} \quad 6 \text{ tens} + \square \text{ ones} = 69$$

Q4. Do as directed.

a) Draw a flower two fingers to right of a bee.



b) Ramu has 38 flowers. He made 3 garlands using 10 flowers in each garland. How many loose flowers are left with him?

c) Make the bill.

	Rupees
Dosa	25
Uthappam	30
Total	<hr/> <hr/>

d) Neha has 15 frocks. Leela has 10 frocks. How many frocks do they have in all?

e) Deepak bought a bat for 48 rupees and a ball for 20 rupees. How much money will he pay?

f) Amit has 25 story books and Payal has 35 story books. Who has more story books and how many more?

ATOMIC ENERGY CENTRAL SCHOOL-INDORE

Class II

Subject- EVS (Worksheet)

Session 2015-16

Name -----

Roll No -----

Q-1 Choose the correct answer.

- i) We wear -----(woollen/cotton) clothes in winter.
- ii) We eat juicy watermelon in -----(summer/rainy) season.
- iii) A pilot sits in a special room called -----(aeroplane/cockpit).
- iv) A vet takes care of ----- (human beings/ animals).
- v) Eating is important for good -----(wealth/health).

Q-2 Answer the following questions.

- i) Can you see the sun on a cloudy day? Why?

Ans -----

- ii) What is loo?

Ans -----

- iii) How can overeating harm us?

Ans -----

144

(2)

iv) What does a potter use to make pots and diyas?

Ans -----

v) Where can you see tie and dye designs?

Ans -----

vi) Write any two points that your book has taught you?

Ans -----

Q-3 Draw pictures of –

(i) Pot

(2)

(3)

(ii) Rainy Season.

(iii) A Clock showing 6 O' Clock .

(3)