

परमाणु ऊर्जा केन्द्रीय विद्यालय, इन्दौर
हिन्दी कार्य पत्रक - 2015-2016

कक्षा- 4

एफ ए 3 & SA2

नाम - _____

प्रश्न 1 बताओ किन-किन चीजों को -

कुतरा जा सकता है	बिखराया जा सकता है	काटा जा सकता है
_____	_____	_____
_____	_____	_____
_____	_____	_____

प्रश्न 2 इस शरारती जीव के अलावा और कौन-कौन से जीव तुम्हारे घर में घुस जाते हैं ?

उत्तर - _____

प्रश्न 3 नीचे लिखे शब्दों के अर्थ लिखो ।

खलीता = _____ छन्ने = _____
धाता = _____ दुनिया = _____
रात = _____ शरारत = _____

प्रश्न 4 नीचे लिखी चीजों की विशेषता बताने वाले शब्द सोचकर लिखो ।

_____ हलवा _____ पेड़ _____ नमक
_____ चींटी _____ पत्थर _____ कुरता
_____ चश्मा _____ झंडा _____ लड़की

प्रश्न 5 नीचे लिखे शब्दों में सही जगह पर – और ˆ लगाओ ।

धुआ कुआ फूक कहा स्वतंत्र बाध
मा गाव बदगोभी इतजार पसद

प्रश्न 6 इनकी क्या –क्या जिम्मेदारियाँ थीं ?

माँ – _____
पिता – _____
बिंदा – _____

प्रश्न 7 बताओ खूब सारी ताकत और अच्छी सेहत के लिए तुम क्या-क्या खाओगे –पिओगे ?

उत्तर – _____

प्रश्न 8 इनमें कौन –कौन से ईंधन का इस्तेमाल होता है ?

प्रश्न 9 नीचे लिखे प्रश्नों के उत्तर लिखो ।

1 कविता पढ़कर बताओ कि यह शरारती जीव कहाँ – कहाँ गया होगा ?

उत्तर — _____

2 किस तरह की चीजों का सबसे ज्यादा नुकसान हुआ ?

उत्तर — _____

3 कविता में बहुत से नुकसान गिनाए गए हैं । तुम्हारे हिसाब से दूनमें से कौन सा नुकसान सबसे बड़ा है और क्यों ?

उत्तर — _____

4 कबाड़ी क्या –क्या सामान खरीदते हैं ?

उत्तर — _____

5 तुम्हारे घर से सामान ले जाकर कबाड़ी उसका क्या करते हैं ?

उत्तर — _____

6 पता करो कि पुराना अखबार या रद्दी किस भाव बिकते हैं ?

उत्तर — _____

7 अगर कबाड़ी तुम्हारे घर का कबाड़ न खरीदे तो क्या होगा ?

उत्तर — _____

8 धनी ने गाँधीजी से सुबह के समय बात करना क्यों ठीक समझा होगा ?

उत्तर — _____

9 धनी बिन्नी की देखभाल कैसे करता था ?

उत्तर — _____

10 धनी को यह कैसे महसूस हुआ होगा कि आश्रम में कोई योजना बनाई जा रही है ?

उत्तर — _____

11 राजा किसी को भी दान क्यों नहीं देना चाहता था ?

उत्तर — _____

11 नीचे लिखे शब्दों के बारे में लिखो ।

स्वतंत्रता — _____

सत्याग्रह — _____

खादी — _____

चरखा — _____

प्रश्न 11 गाँधीजी (बापू) के बारे में पाँच वाक्य लिखो ।

— X —

(6)

Atomic Energy Central School, Indore

Worksheet Unit 6, 7, 8 (2015 -16)

Subject – English Class-IV Sec _____

Name _____ Roll no. _____ Date _____

Q1. Write the past tense of the following.

twirl _____ know _____ lead _____ begin _____

accept _____ come _____ grow _____ say _____

Q2. Write the plurals of the following.

lodge _____ beast _____ root _____ flower _____

earth _____ foot _____ friend _____ nest _____

Q3. Write the rhyming words of the following.

mire _____ corn _____ heat _____ mess _____

hour _____ day _____ where _____ roots _____

Q4. Add "ly" to the following words.

slow _____ fluent _____ quiet _____ sudden _____

happy _____ friend _____ swift _____ quick _____

Q5. Write eight words end with "ing"

Q6. Write five sentences "How you will help and take care of your grandparents".

Q7. Write five sentences "How books are important for us".

Q8. Write five sentences on " My garden".

Q9. Answer the following questions.

1) Name two animals that live in stable .

2) What did the lady do with the pony ?

3) Have you seen people beating animals? What do you think of such people ?

4) Who finally made the cow get up and how ?

5) Do you tease animals ?

6) Who was Hiawatha ?

7) What did the learned Pundit claim to know ?

8) From where do flowers get water ?

Q10 Fill in the blanks.

- 1) The squirrel has a long _____. (tail/tale)
- 2) The king ^{sits} on the _____. (thrown/throne)
- 3) Ram was a farmer. He wanted to sell _____ goat. (his/her)
- 4) Beavers live in _____. (nests/lodges)
- 5) Children _____ walk on their heads. (can/cannot)

Q11. Write the languages spoken in –

Assam _____ Tamilnadu _____ Kerala _____

Orissa _____ Goa _____ Maharashtra _____

Q12. Under the silent letters.

hour knit wrong honesty

often write talk walk

(4)

ATOMIC ENERGY CENTRAL SCHOOL INDORE

Worksheet (2016)

Std:IV

Mathematics

Date:

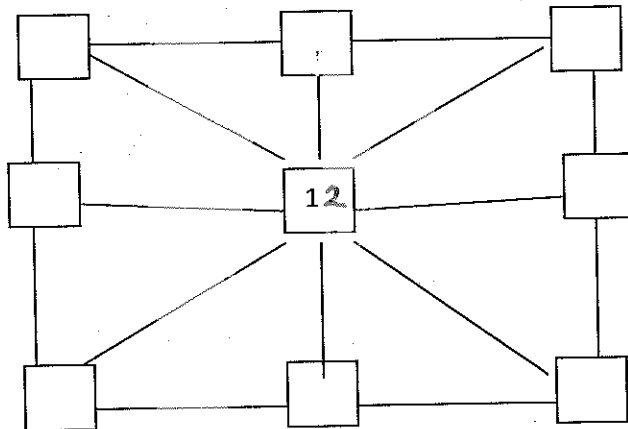
Name _____ Roll No _____ Section _____

Q1. Fill in the blanks.

- a) A _____ can be used to trace a circle. (bangle / dice)
- b) The radius of a circle is _____ of its diameter. (half / double)
- c) Two quarters make a _____. (half / whole)
- d) 1 litre = _____ millilitres (100 / 1000)
- e) If the cost of 1 kg potatoes is Rs.8, then the cost of $\frac{3}{4}$ kg potatoes will be _____ rupees. (5 / 6)
- f) Observe the pattern: 105, 110, _____, _____, 125, 130.

Q2. Do as directed.

- a) Complete the magic square. (Use numbers 8 to 16 and rule that the numbers on each line add up to 36)



- b) Complete the following pattern.

$$5 + 6 + 7 + 8 = 26$$


$$6 + 7 + 8 + 9 = \underline{\hspace{2cm}}$$

$$7 + 8 + 9 + 10 = \underline{\hspace{2cm}}$$

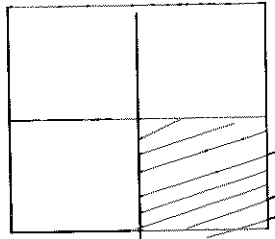
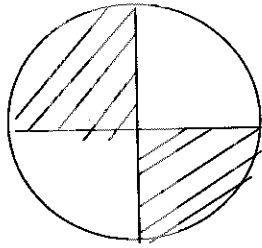
$$8 + 9 + 10 + 11 = \underline{\hspace{2cm}}$$

Each time, the sum increases by _____.

c) Draw a line which divides these shapes into half.


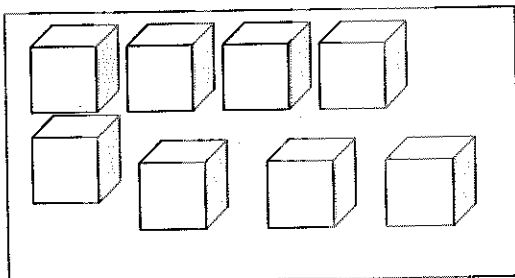


d) What part of the whole is shaded? Write below each shape.



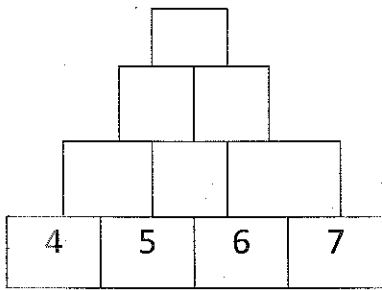
e) Draw a circle of 2cm and mark its centre as 'O'.

f) Colour $\frac{1}{4}$ of these shapes.



Q3.Solve:



a))Complete the number tower.



b)There are 50 students in a class. $\frac{1}{2}$ of them are girls.How many children are boys?

c)To get a change of 500 rupees,How many notes of 50 rupees will be required?

d)Which pan of the balance will go down?Show by drawing an arrow pointing downwards(↓).



ATOMIC ENERGY CENTRAL SCHOOL, INDORE

Class-IV Sec-_____ Worksheet- Environmental Studies (2015-16) FA3 & SA 2

Name of the student - _____

Q.1 Fill in the blanks.

- i) Vaishali's father is a _____ by profession.
- ii) The dove makes its nest in a _____ plant.
- iii) Sharp teeth are used for cutting and _____ food.
- iv) Mother's brother is called _____.
- v) _____ was called the childrens' panchayat.
- vi) The Desert Oak tree is found in _____.
- vii) _____ rice is cooked during the celebration of Bihu.

Q.2 Give Reasons.

- i) Babuji sells the previous day's vegetables first.

- ii) Nandita's house in the village was different from her mama's house in the city.

iii) **The guest was not ready to drink cold drink instead of water.**

iv) **Mid day meal is served in schools.**

v) **A person suffering from diarrhoea and vomiting is given water mixed with sugar and salt.**

Q.3 Answer the following questions.

i) Why did Vaishali get up at 3o' clock in the morning?

ii) Why is April a busy month for the birds?

iii) Why is water sprinkled over the vegetables to be sold?

iv) Where does a koel bird lay its eggs?

v) Write a few things that Nandita was afraid to do when she first came to Mumbai .

vi) Why did Raziya ask Pushpa to throw away the water that was filled the previous day?

vii) Name any five things that grow and any five things that do not grow.

viii) Where is Bihu celebrated?

ix) Write any two differences between the hostel life and the life at home.

x) What is Bhela Ghar?
