

परमाणु ऊर्जा केन्द्रीय विद्यालय, इन्दौर
हिन्दी कार्य पत्रक - 2015-2016

कक्षा- 4

एफ ए 4 & SA 2

हिन्दी

प्रश्न 1 नीचे लिखे वाक्यों को अपने शब्दों में लिखो ।

(क) मगर बूँद भर तेल साँझ तक भी क्या तुम पाओगे ?

(ख) बैल हमारा नहीं अभी तक मंतिख पढ़ पाया है ।

(ग) सिखा बैल को रखा इसने निश्चय कोई ढब है ।

(घ) जहाँ न कोई बात वहाँ भी नई बात गढ़ते हैं ।

प्रश्न 2 बताओ ये लोग क्या गढ़ते हैं ?

सुनार - _____

कवि - _____

लुहार - _____

कुम्हार - _____

ठठेरा - _____

लेखक - _____

प्रश्न 3 शब्दों के अर्थ लिखो ।

ढब = _____

भेद = _____

गजब = _____

मंतिख = _____

छल = _____

पर = _____

प्रश्न 4 सुनीता के बारे में पढ़कर तुम्हारे मन में कई सवाल और बातें आ रही होंगी । वे बातें सुनीता को पत्र लिखकर बताओ ।

प्रिय सुनीता

तुम्हारी _____

प्रश्न 5 ऐसे कुछ रंगों के नाम लिखो ।

उदाहरण –आसमान – आसमानी

प्रश्न 6 नीचे दी गई तालिका को आगे बढ़ाओ ।

हुदहुद — पक्षी

प्रश्न 7 मुहावरों का वाक्यों में प्रयोग करो ।

दिन रात एक करना —

पसीना बहाना —

एड़ी चोटी का जोर लगाना —

प्रश्न 8 नीचे लिखे प्रश्नों के उत्तर लिखो ।

(क) पढ़क्कू का नाम पढ़क्कू क्यों पड़ा ?

उत्तर —

(ख) सुनीता को दुकानदार का व्यवहार क्यों बुरा लगा ?

उत्तर — _____

(ग) हुदहुद कोकहीं "हजामिन" चिड़िया और कहीं "पदुबया" के नाम से क्यों
फुकारते हैं ?

उत्तर — _____

(घ) अगर तुम्हें हुदहुदको पहचानने में किसी की मदद करनी है तो तुम
उसे कौन -कौन सी बातें बताओगे ? पाँच वाक्यों में लिखो ।

उत्तर — _____

(५)

(ड) हर जगह नारियल के दाम में फर्क क्यों था ?

उत्तर — _____

प्रश्न 10 कौवे या कबूतर पर पाँच वाक्य लिखो ।

उत्तर — _____

प्रश्न 11 बताओ इनका क्या हुआ ? ये घटे या बढ़े ?

नारियल का दाम — _____

भीखूभाई का लालच — _____

रास्ते की लम्बाई — _____

भीखूभाई की थकान — _____

प्रश्न 12 लिंग बदलकर लिखो ।

(5)

उदाहरण — नाना —नानी

काका — —————

दर्जी — —————

मालिन — —————

टोकरा — —————

मटका — —————

गद्दा — —————

पतीला — —————

घोड़ा — —————

प्रश्न 13 भीखूभाई के बारे में पाँच वाक्य लिखो ।

उत्तर — —————
—————
—————
—————
—————

Atomic Energy Central School, Indore

Worksheet Unit 9 and 10 (2015 -16)

Subject – English Class-IV Sec _____

Name _____ Roll no. _____ Date _____

Q1. Write the past tense of the following.

puzzle _____ make _____ snatch _____

wonder _____ buy _____ read _____

Q2. Write six things made of wood.

Q3. Make opposite with the words using dis or in

secure _____ respect _____ own _____

capable _____ able _____ sufficient _____

Q4. Add "er or r" to the following words.

joke _____ speak _____ dance _____

strange _____ write _____ juggle _____

Q5. Write six things that a carpenter use at work.

Q6. Write meaning and form sentences of the following .

1) Finally

2) skinny

3) galore

4) naughty

5) amazed

6) puppet

7) stiff

Q7. Answer the following questions.

1) What did the carpenter buy?

2) What did the Pinocchio say in the end?

3) What did the carpenter call his puppet?

4) From where did the naughty boy come?

5) What did the naughty boy wonder about?

6) Where did the children go to buy books?

7) What did the library door say?

Q8. Write the Nationality of the following countries.

- 1) China _____
- 2) India _____
- 3) Australia _____
- 4) Scotland _____
- 5) America _____
- 6) France _____

Q9. Give another words to the following.

surprised _____ strange _____ completed _____

Q10. Fill in the blanks.

- 1) Do you want a story book _____ a book of poem. (and/or)
- 2) I want 1Kg apples _____ 2 Kg mangoes. (and/or)
- 3) The peacock is a _____ bird.(any describing word)
- 4) It was a _____ night . A _____ girl was frightened. (any describing word)
- 5) Pinocchio is a _____ puppet. (calm/naughty)
- 6) An _____ is a place where aeroplanes take off and land.
- 7) A _____ is a place where children study.
- 8) A _____ is a place where food is cooked.

ATOMIC ENERGY CENTRAL SCHOOL INDORE

Worksheet (2016)

Std:IV

Mathematics

Date:

Name _____ Roll No _____ Section _____

Q1. Fill in the blanks.

a) 28 legs mean _____ cats. (6 / 7)

b) Table of 7 can be made with the tables of 2 and _____. (4 / 5)

c) $96 \div 8 =$ _____

d) To weigh a $\frac{1}{2}$ kg packet of salt, 2 weights of _____ grams are required.

(250 / 500)

e) The letter 'e' comes _____ times in the word 'engineer'. (2 / 3)

f) The boundary of square with a side 4cm is _____ cm. (4cm / 16cm)

Q2. Do as directed.

a) Find the quotient and the remainder.

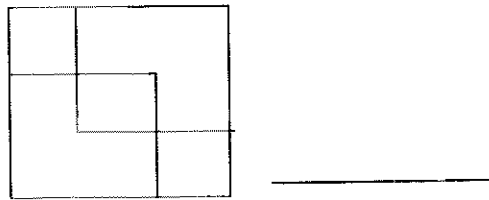
$288 \div 6$

b) Read the table and answer the question given below.

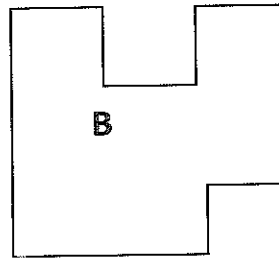

Parcel weight	Postal rates
	Rs-p
50 g or less	5.00
For every additional 50 g	3.00

Ravi wants to send a parcel weighing 150g. Find the cost of sending the parcel.

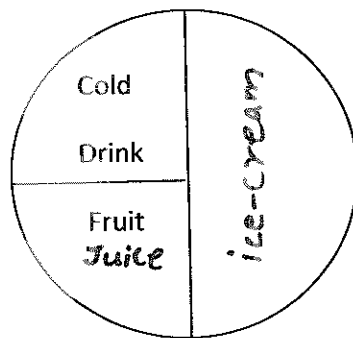
c) How many such square tiles are needed to cover this big square completely?



d) Two squares each of side 2 metres are cut out from square A. The side of square A is 8 metres. A new figure formed is B. Find the length of the boundary of figure B.



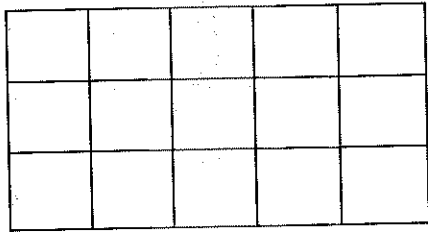
e) There are 40 students in a class. Some students prefer ice-cream, some fruit juice and some cold drinks.



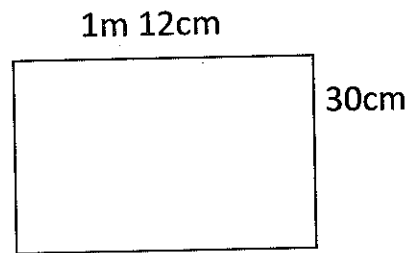
- i) Number of students who prefer ice-cream is _____.
- ii) Number of students who prefer fruit juice is _____.
- iii) Number of students who prefer cold drinks is _____.
- iv) Number of students who prefer ice-cream is _____ the number of students who prefer cold drinks. (twice / half)

Q3. Solve.

a) Divide the figure into 5 equal parts.

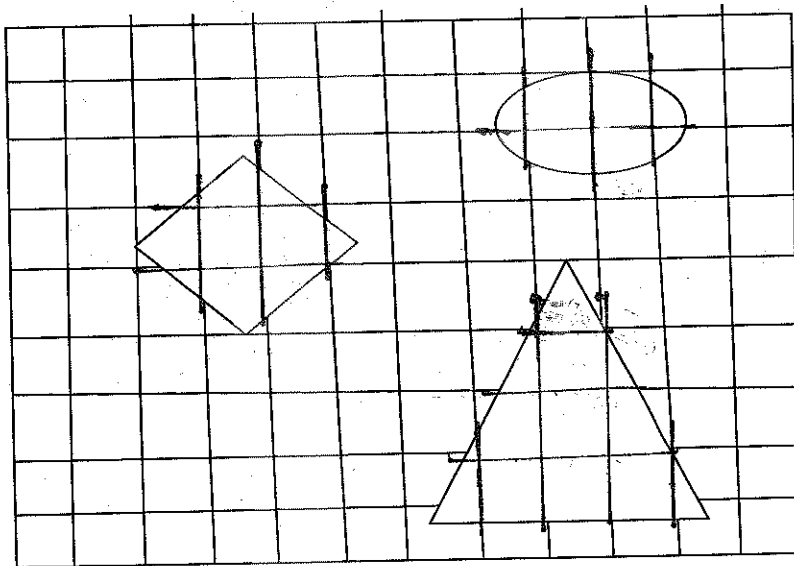


b) A table cloth is 1m 12cm long and 30cm wide. If you want to fix a lace around the cloth, how much lace will be needed?



c) Which is the biggest figure? _____

Which is the smallest figure? _____



d) Rita wants to pack 92 soap bars in a carton. How many cartons does she need for packing 552 soap bars?

ATOMIC ENERGY CENTRAL SCHOOL, INDORE

Class-IV Sec-_____ Worksheet- Environmental Studies (2015-16) FA4 *LSA2*

Name of the student - _____

Q.1 Fill in the blanks.

- i) Lieutenant Commander Wahida Prism is a _____ in the Indian Navy.
- ii) _____ is a spice used to give flavour to food.
- iii) A chair with wheels is called a _____.
- iv) _____ was the first woman to lead a parade.
- v) The countries around Abu Dhabi are located in _____ area.

Q.2 Give Reasons.

- i) Shanta and Shashi were surprised to see many fruit trees in India.

- ii) Wahida's family didn't stop her from getting into the defense forces.

153

iii) Chuskit was different from the other children.

Q.3 Answer the following questions.

i) Why is the village of Mukhtapur famous?

ii) Name a few common items over which people fight in their houses.

iii) What would have the children thought if Pilloo aunty had paid less money to the kulfi seller ?

iv) Name the fruits found in Abu Dhabi.

v) Name a spice added to both sweet and salty things.

vi) In which other services do people wear uniform as in defense forces.

Name any five of them.

vii) Why didn't Chuskit go to school till she was ten years old?

viii) Should there be different rules for boys and girls? Why?
